

**PAREF Southridge School  
Primary School  
Civics Department**


**Name:** \_\_\_\_\_

**Level and Section:** \_\_\_\_\_ **Date:** \_\_\_\_\_

**Civics and Culture 2**

**First quarter: Activity Sheet 1 (June 26 and June 29)**

**PRIMARY DIRECTIONS**



**Follow the given directions below. Write your answers in your Civics Notebook (6A).**

- 1) Draw and color your bedroom with a top view in your notebook.
- 2) Label the things that can be found inside your room.
- 3) Find five things in your room that you have labeled. Write 2 complete sentences that show objects that can be found in the direction of its south and west.

Example:

1) The south of my bed is my study table.

The west of my bed is a window.

- 4) Use the compass above as a guide.
- 5) Write the complete sentences a page after your room drawing.

**PAREF Southridge School  
Primary School  
Civics Department**

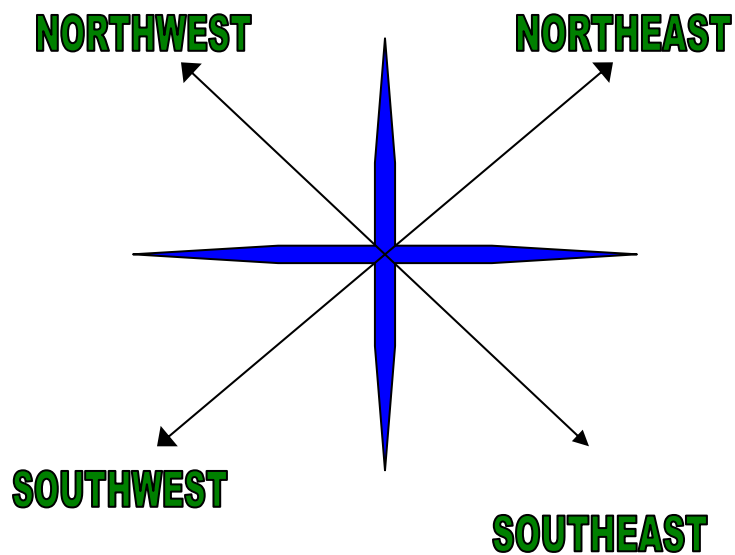
Name: \_\_\_\_\_

Level and Section: \_\_\_\_\_ Date: \_\_\_\_\_

**Civics and Culture 2**

**First quarter: Activity Sheet 2 (June 30 and July 1)**

**Secondary Directions**



**Follow the given directions below.**

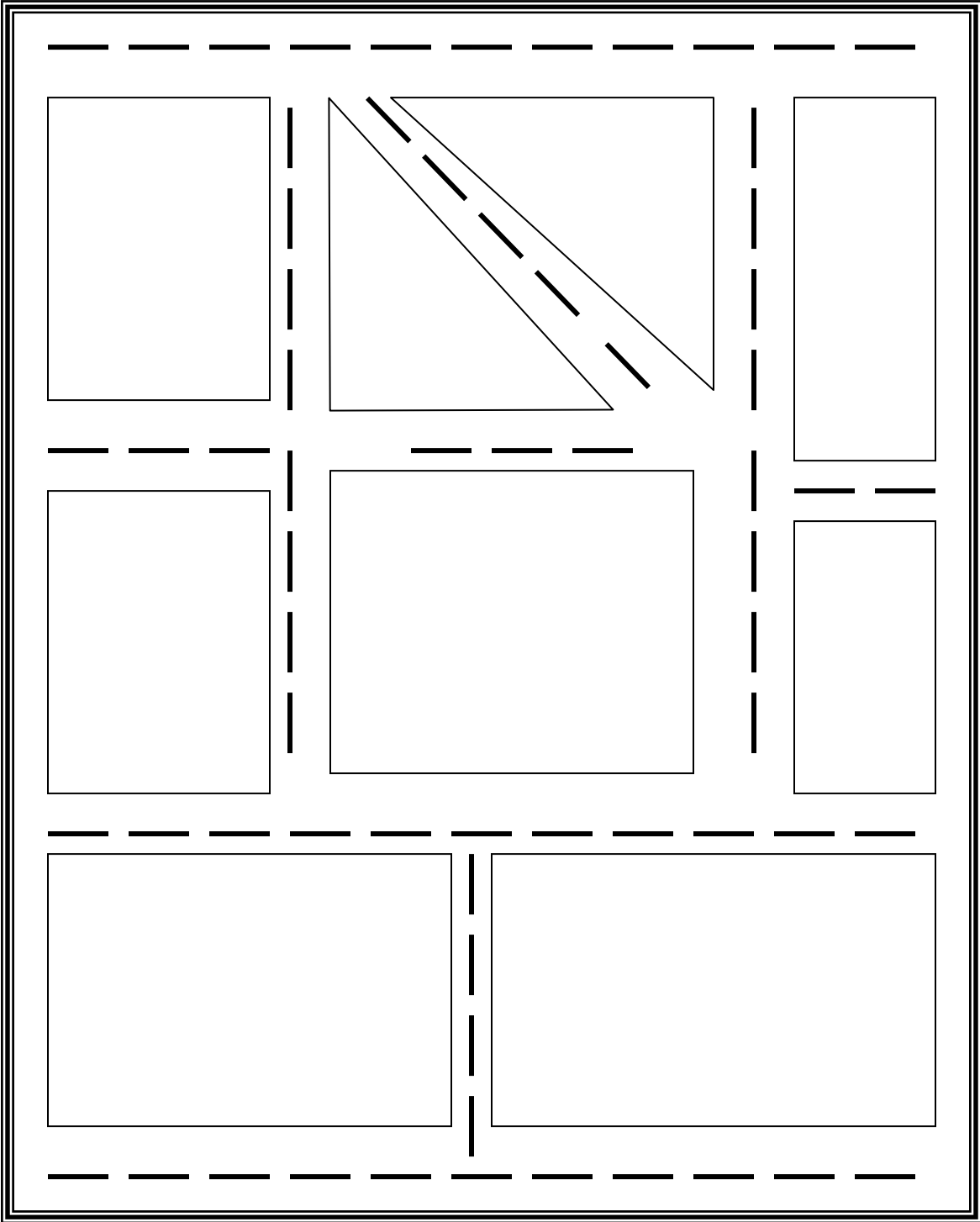
1) On a short bond paper, draw and color your own community map with the following places:

- a) School
- b) Hospital
- c) Church
- d) House
- e) Police Station
- f) Hotel

g) Shopping Mall

h) Public Park

# COMMUNITY MAP



2) Draw the important places in the community inside any of your preferred boxes and triangles in the map.

3) Identify five places that you have drawn in your community map. Write a complete sentence in each of the places that you have given that identifies a place in its **southwest** and **northeast** direction. Write the complete sentences in your Civics Notebook (6A).

*Example:*

1. Hospital - The southwest of the Hospital is the Church.

The northeast of the Hospital is the School.

4) Answer the following in complete sentences in your Civics notebook (6A).

What is the importance of the use of primary and secondary directions in our daily lives? What kinds of jobs or activities make use of primary and secondary directions?